



July

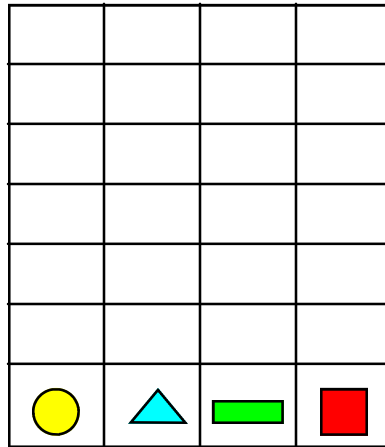
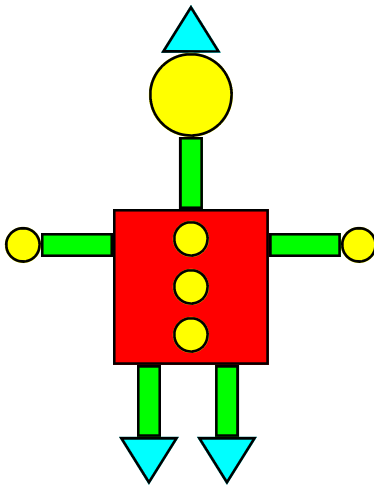
Week 1



1st
Grade

0 1 2 3 4 _ 6 7 8 9 _ 11 12 13 14 _ 16

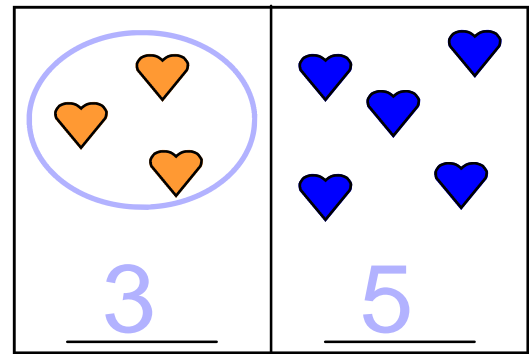
MAKE A BAR GRAPH



Count.

Write how many.


Circle the group that has fewer.



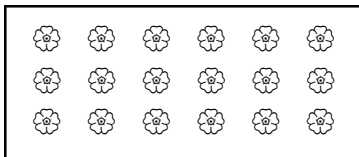
MATCH




11




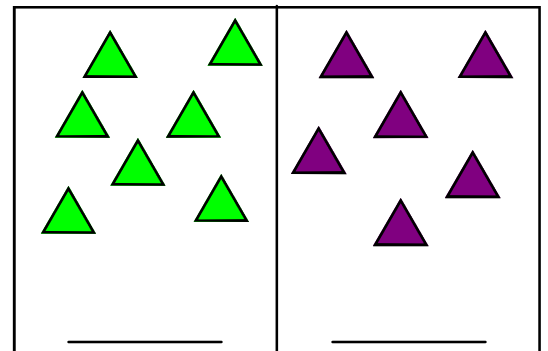
16



13





18



17 18 19 _ 21 22 23 24 _ 26 27 28 29 _ 31 32

July

Week 2



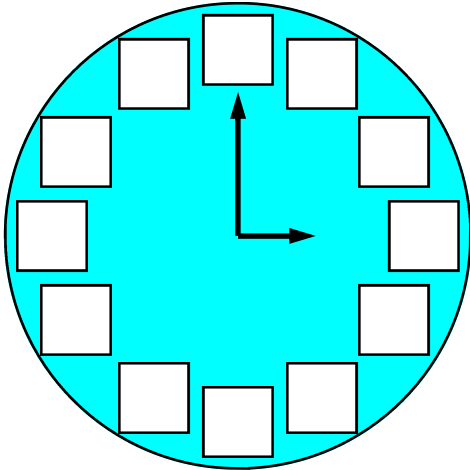
1st
Grade

2 3 4

9 10

14

Write the numbers on the clock.



What time
is it?

o'clock

Circle the number
that is more.

18, 12

1, 6

17, 13

8, 9

14, 11

4, 7

20, 10

9, 5

6, 13

3, 8

15, 16

6, 2

Color:

1																			
2																			
3																			
4																			
5																			
6																			
7																			
8																			
9																			
10																			



17 18 19

26

32

July

Week 3




1st
Grade


0 1 ___ 3 ___ ___ ___ 7 8 ___ ___ 11 ___ ___ 14 ___ 16

Color the first flower green.
Color the seventh flower yellow.


Color the fourth flower blue.
Color the second flower red.




Tell the time.




8 : 0 0




___ : ___



___ : ___

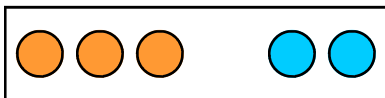


___ : ___

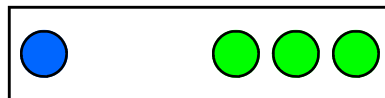


___ : ___


Write an addition number sentence.



3 + 2 = 5



___ + ___ = ___





___ + ___ = ___

___ 18 19 ___ ___ ___ 23 ___ ___ ___ 27 ___ ___ 30 ___ ___

July

Week 4



1st
Grade

0 1 2 3 _ 5 _ 7 _ 9 _ _ 12 _ _ _ 16

Color.

Color the right hand **red**.

Color the left hand **blue**.

Count and Draw.

5 hats




11 balls



8 cats



Complete the pattern.



6 8 6 8 _ _ _



17 18 19 _ _ _ 23 24 25 _ 27 28 _ _ _

August

Week 5



1st
Grade

0 1 2 ___ 4 ___ 6 ___ 8 ___ 10 ___ 12 ___ 14 ___ 16

Solve:

$5 - 2 =$	<input type="text"/>	$4 - 2 =$	<input type="text"/>	$6 - 2 =$	<input type="text"/>	$3 - 3 =$	<input type="text"/>
$4 - 1 =$	<input type="text"/>	$6 - 1 =$	<input type="text"/>	$5 - 1 =$	<input type="text"/>	$6 - 4 =$	<input type="text"/>
$2 - 0 =$	<input type="text"/>	$5 - 3 =$	<input type="text"/>	$4 - 3 =$	<input type="text"/>	$3 - 1 =$	<input type="text"/>

How much money? Use real coins.




_____ ¢



_____ ¢


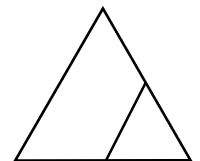

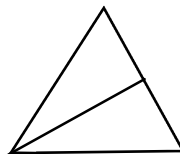


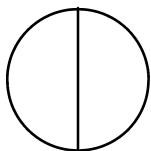


_____ ¢



_____ ¢

Circle objects that show half.
Color one-half.



___ 18 ___ 20 ___ 22 ___ 26 ___ 28 ___ 30 ___ 32

August

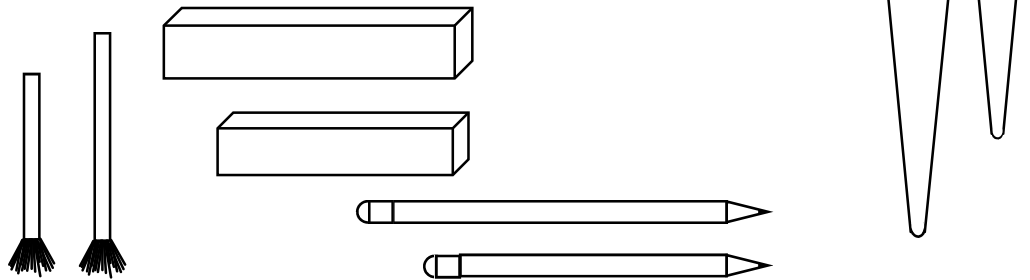
Week 6



1st Grade

0 1 ___ 3 ___ 5 ___ 7 ___ 9 ___ 11 ___ 13 ___ 15 ___

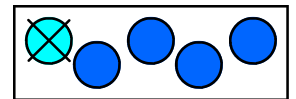
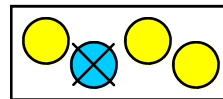
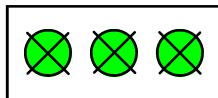
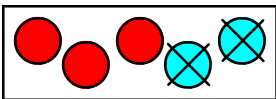
Color the longer item yellow.
Color the shorter item green.



Color:

11																				
12																				
13																				
14																				
15																				
16																				
17																				
18																				
19																				
20																				

Write a subtraction number sentence.



5 - 2 = 3

___ - ___ = ___

___ - ___ = ___

___ - ___ = ___

17 ___ 19 ___ 21 ___ 23 ___ 25 ___ 27 ___ 29 ___ 31 ___

August

Week 7



1st
Grade

0 1 2 _ _ 5 6 7 _ 9 _ _ _ 13 _ 15 _

Count. Circle the group that shows more. Write how many.

 12	 9	 _____	 _____	 _____	 _____	 _____	 _____
--------	-------	-----------	-----------	-----------	-----------	-----------	-----------

Ordering numbers:

1, 2, 3, 4, 5, 6.

9, 10, 11, __, __, __.

14, 15, 16, __, __, __.

25, 26, 27, __, __, __.

Solve:

$2 + 3 = \square$

$3 + 3 = \square$

$0 + 5 = \square$

$4 + 1 = \square$

$2 + 1 = \square$

$1 + 1 = \square$

$0 + 4 = \square$

$4 + 2 = \square$

$5 + 1 = \square$

$3 + 1 = \square$

$2 + 0 = \square$

$2 + 2 = \square$


17 18 _ _ 21 _ _ _ 25 _ 27 _ _ _ 31 _



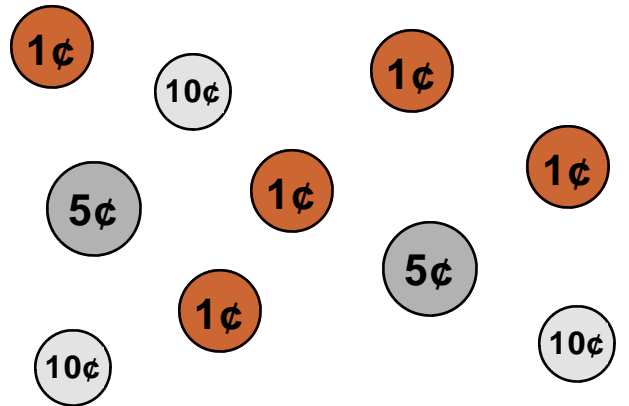
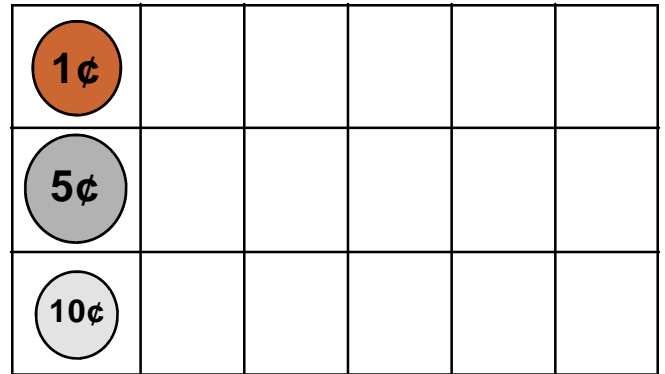
0 _____ 10 _____

Color:

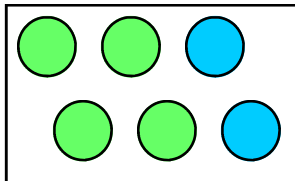
- Circles - Red
- Squares - Green
- Triangles - Blue
- Ovals - Orange
- Diamonds - Yellow
- Rectangles - Purple



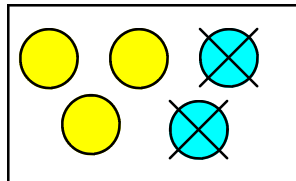
Make a Bar Graph.



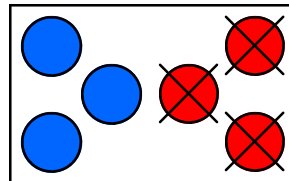
Write a number sentence.



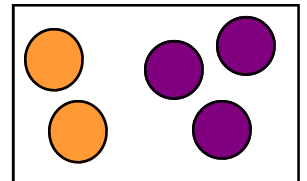
$$4 + 2 = 6$$



$$5 - 2 = 3$$



$$\square = \square$$



$$\square = \square$$

20 _____

30 _____